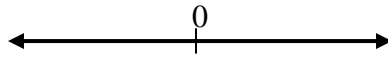


NAME: _____

Practice: Interval Notation

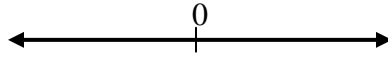
Put in interval notation **AND** draw a graph of each inequality.

1. $x \geq 4$



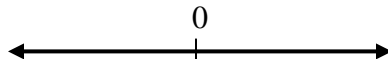
1. _____

2. $x < 6$



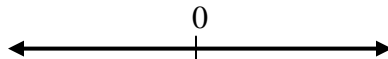
2. _____

3. $x \leq -2$



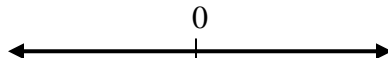
3. _____

4. $x > 8$



4. _____

5. $x < -10$



5. _____

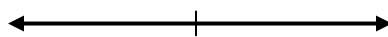
Write each interval as an inequality, and draw a graph for each.

6. $(-\infty, -8]$



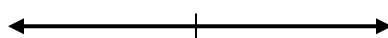
6. _____

7. $[5, \infty)$



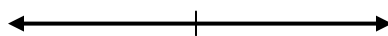
7. _____

8. $(-2, \infty)$



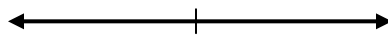
8. _____

9. $[-10, \infty)$



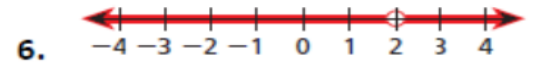
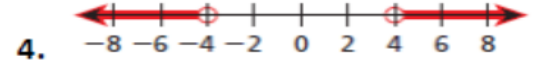
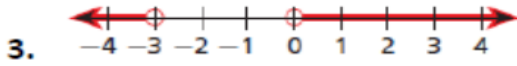
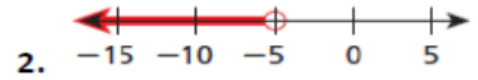
9. _____

10. $(-\infty, 6)$



10. _____

For each number line, write the given set of numbers in interval notation.



Name the domain and range of each relation using interval notation.

